

$$17 + 34$$

$$45 + 25$$

$$36 + 17$$

Name: \_\_\_\_\_

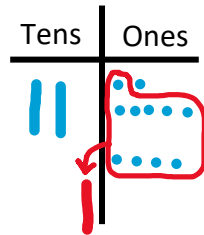
Date: \_\_\_\_\_

## Double and Single-Digit Addition Part 3

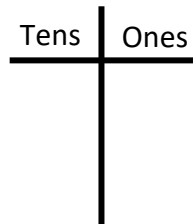
Use the T-chart to complete the following math problems:

Example:

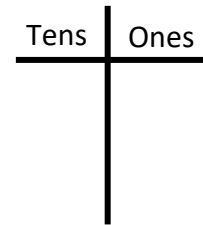
$$\begin{array}{r} 27 \\ + 4 \\ \hline 31 \end{array}$$



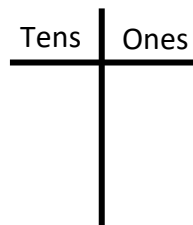
$$\begin{array}{r} 16 \\ + 28 \\ \hline \end{array}$$



$$\begin{array}{r} 23 \\ + 38 \\ \hline \end{array}$$



$$\begin{array}{r} 17 \\ + 14 \\ \hline \end{array}$$



$$\begin{array}{r} 26 \\ + 39 \\ \hline \end{array}$$

